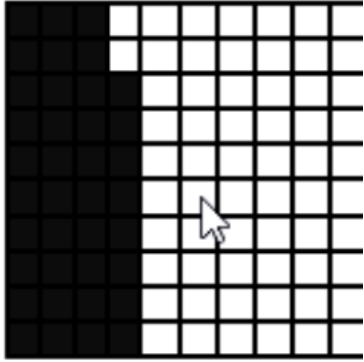


1. What percentage of the shape is plum black?

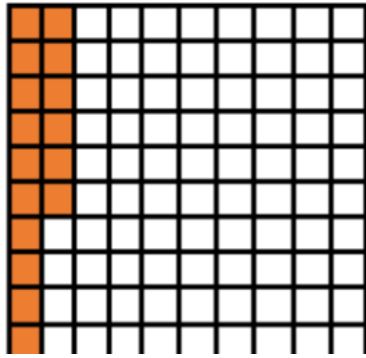


- A. [38%](#)
- B. [62%](#)

You are right! Go to [next](#).

You are wrong! [Try again.](#)

2. What percentage of the shape is orange?




A. [16%](#)

B. [94%](#)

You are right! Go to [next](#).

You are wrong! [Try again.](#)

3. What is percentage of the shape?




- A. [25%](#)
- B. [28%](#)

You are right! Go to [next](#).



You are wrong! [Try again.](#)

4. What percentage of the shape is light blue?

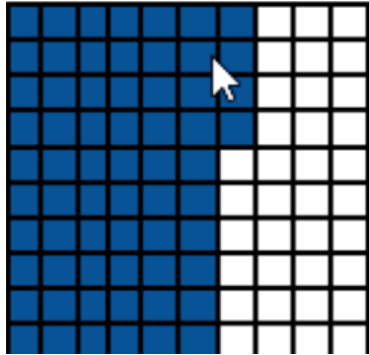


- A. [34%](#)
- B. [66%](#)

You are right! Go to [next](#).

You are wrong! [Try again.](#)

5. What percentage of the shape is blue?



- A. [54%](#)
- B. [64%](#)

You are right!

You are wrong! [Try again.](#)